


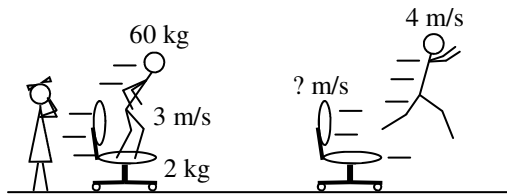
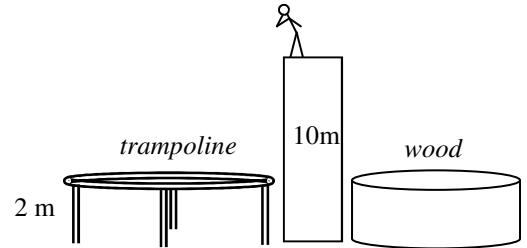
Due: Fri., Dec 8

2011 PreAP Momentum 6

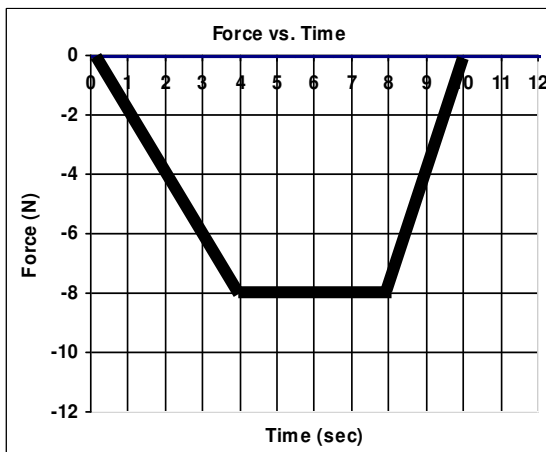


- * Slim Jim and Kim go ice skating. Standing amorously on the ice, they push off from each other. Jim is 60 kg and Kim is 40 kg. If Kim ends up moving to the right at 2 m/s. How fast is Jim moving?

- Slim Jim is choosing to jump onto a trampoline or a wood block.
 - In which case will he have the most momentum before hitting?
 - In which case will he feel the most force?
 - In which case will he take more time to stop?
 - * In which case will he feel the greatest impulse?
 - * Jim jumps from 10 m. How fast is Jim moving when he lands on the 2 m tall trampoline? (*Good choice, Jim!*)

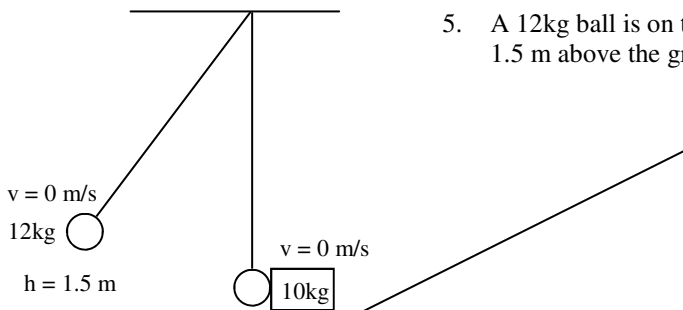


- Much to Kim's horror, Slim Jim tries to impress her. Since she knows he is a very poor skateboarder, he chooses to jump from a 2 kg rolling chair, instead. Calculate the final velocity of the chair.



- A 3.5 kg object moving 6 m/s experiences the forces shown.
 - When is there a positive force?
 - When is the object coasting (no acceleration)?
 - * Calculate the impulse shown on the graph.

- Calculate the change of momentum of the object.
- * Calculate the final velocity of the object.



- A 12kg ball is on the end of a long string. The ball is then pulled back so that it is 1.5 m above the ground. At the bottom of its swing, it strikes a 10 kg box. ($g = 10\text{m/s}^2$)
 - * Calculate the velocity of the ball just before it strikes the box.

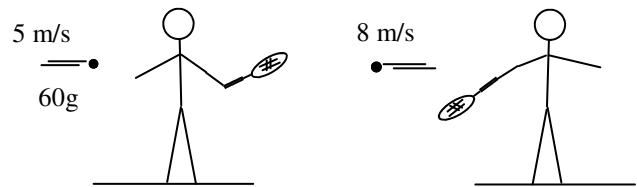
- After the collision the ball is still going 0.25 m/s to the right.*
- * How fast is the box moving right after the collision?

The box slides up the ramp.

- What vertical height does the box reach?

6. Slim Jim hits a tennis ball, as shown.

- A. * What is the mass of the ball in kg?
- B. * Calculate the initial momentum of the ball.
- C. Calculate the final momentum of the ball.
- D. * Calculate the ball's change of momentum.
- E. Was the force on the ball + or -?
- F. Was the impulse on the ball + or -?
- G. What was the impulse on the ball?



- 1) -1.33 m/s ; 2D) same; 2E) use conservation of energy. 4C) first triangle is -16 kgm/s ; total = -56 kgm/s
- 4E) -10 kgm/s 5A) Use energy. $v = 5.78 \text{ m/s}$ 5B) use momentum $v = 6.64 \text{ m/s}$
- 6A) 0.06 kg 6B) 0.30 kgm/s 6D) -0.78 kgm/s