

Name: \_\_\_\_\_

Period: \_\_\_\_\_

**HW—20:2**  
**Laws of Chemistry**  
**Mr. Murray, IPC**

**Assigned: Mon., 11/10/03**

**Due: Mon., 11/10/03**

Physical or Chemical Change?

Why? (Your evidence)

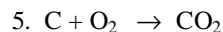
1. Melting Plastic \_\_\_\_\_

2. Burning Plastic \_\_\_\_\_

Consider this compound:  $\text{Al}_2(\text{CO}_3)_3$

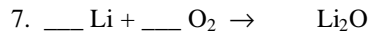
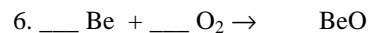
3. How many aluminums does it have? \_\_\_\_\_

4. How many oxygens does it have? \_\_\_\_\_



NAME the product.

Balance these Equations



Name: \_\_\_\_\_

Period: \_\_\_\_\_

**HW—20:2**  
**Laws of Chemistry**  
**Mr. Murray, IPC**

**Assigned: Mon., 11/10/03**

**Due: Mon., 11/10/03**

Physical or Chemical Change?

Why? (Your evidence)

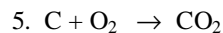
1. Melting Plastic \_\_\_\_\_

2. Burning Plastic \_\_\_\_\_

Consider this compound:  $\text{Al}_2(\text{CO}_3)_3$

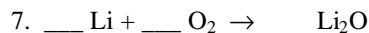
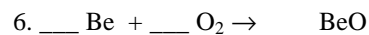
3. How many aluminums does it have? \_\_\_\_\_

4. How many oxygens does it have? \_\_\_\_\_



NAME the product.

Balance these Equations



Name: \_\_\_\_\_

Period: \_\_\_\_\_

**HW—20:2**  
**Laws of Chemistry**  
**Mr. Murray, IPC**

**Assigned: Mon., 11/10/03**

**Due: Mon., 11/10/03**

Physical or Chemical Change?

Why? (Your evidence)

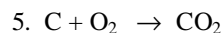
1. Melting Plastic \_\_\_\_\_

2. Burning Plastic \_\_\_\_\_

Consider this compound:  $\text{Al}_2(\text{CO}_3)_3$

3. How many aluminums does it have? \_\_\_\_\_

4. How many oxygens does it have? \_\_\_\_\_



NAME the product.

Balance these Equations

