

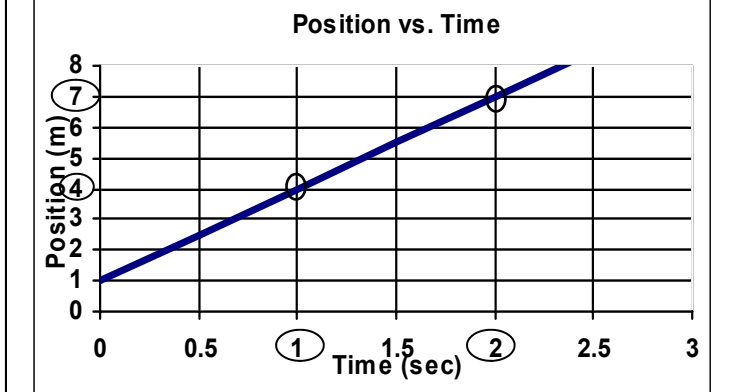
Name: _____

Period: _____

IPC Physics Final Review 2

<p>MA = 5 F or $F_w = 5\text{ N}$ d or $\lambda = 5\text{ m}$ W or $E = 5\text{ J}$ R = 5 Ω I = 5 A p = 5 kgm/s V = 5 v P = 5 w f = 5 Hz T = 5 sec a = 5 m/s²</p>	<p>5 kgm/s 5 Ω 5 w 5 5 sec 5 N 5 m 5 A 5 m/s² 5 V 5 Hz 5 J</p>	<p>Show heat transfer:</p> <div style="border: 1px solid black; padding: 5px; margin-bottom: 10px;"> <p style="text-align: center;">20°C 55°C</p> <p style="text-align: center;">← →</p> </div> <div style="border: 1px solid black; padding: 5px;"> <p style="text-align: center;">70°C 55°C</p> <p style="text-align: center;">→ ←</p> </div> <p>Conduction, convection, or radiation?</p> <p>Insulator or Conductor?</p> <p>Metal: C ___ Wood: I ___ Plastic: I ___ Copper: C ___ Foam: I ___ Air: I ___</p>	<p>Find the speed of a bike that travels 120 meters in 20 seconds. $S = D/T = 120\text{ m} / 20\text{ sec} = 6\text{ m/s}$</p> <p>A car starts 10 m away, then drives to 210 meters away in 40 seconds. How fast did they drive? $S = D/T$ (but D is really ΔD, change of distance). So $S = \Delta D/\Delta T = 200\text{ m} / 40\text{ sec} = 5\text{ m/s}$</p> <p>What force results in 3 m/s² of acceleration to a 15 kg mass? $F = ma = (15\text{ kg}) \times (3\text{ m/s}^2) = 45\text{ N}$</p> <p>A car speeds to 250 mph in 50 seconds. Calculate acceleration. $a = \Delta D/\Delta T = 250\text{ mph} / 50\text{ sec} = 5\text{ mph/sec}$</p>
---	---	---	---

<p style="text-align: center;">Experimental or Control Variables:</p> <p>You would not change these in the experiment: <i>Control</i></p> <p>You would vary this to figure out how it works: <i>Experimental</i></p> <p>You should have only one of these: <i>Experimental</i></p> <p>All the other variables are: <i>CV</i></p>	<p><i>You are trying to find out if snow tires help a car stop in snow.</i></p> <p>The amount of snow: <i>CV</i></p> <p>The car used: <i>CV</i></p> <p>The type of tire: <i>EV (only thing that varies)</i></p>
--	---



Where was the object at 2 seconds? *7 meters*

When did the object reach 4 meters? *1 seconds*

Find the slope of the graph (must show work)
 $Slope = rise/run = \Delta y/\Delta x$
 $\Delta y = 7 - 4 = 3\text{ m}$ $slope = 3\text{ m}/1\text{ sec} = 3\text{ m/s}$
 $\Delta x = 2 - 1 = 1\text{ sec}$
 What does the slope you just found stand for? *speed*

A girl is ice skating and has 35 kgm/s of momentum. After she bumps into a friend, she has 25 kgm/s of momentum. How much did she give her friend? *Use Law of Conservation of Momentum: 35 - 25 = 10 kgm/s*

Which has more inertia: a bus or a bike? Why?
The bus has more mass.

Which has more momentum: a house or a fast airplane? Why?
A house is not moving (v = 0) so p = 0

A 3 N book rests on a table. Why doesn't it fall?
Newtons's 3rd law—table pushes back with = and opposite 3N force.

When an astronaut lands on the moon, does his mass change?
No, mass is not dependent on gravity.

Does his weight change? Does his inertia change?
Yes, weight is dependent on gravity. No, inertia depends on mass.

Which of Newton's Three Laws Applies?

3 ___ A rocket moves forward because it pushes out gases from the back.

1 ___ It is hard to push a car, then hard to stop it.

2 ___ A 50 N force gives more accelerates to a 5 kg object than a 10 kg object.

Using $g = 10\text{ m/s}^2$, find the weight of a 3 kg mass.
 $F_w = mg = (3\text{ kg}) \times (10\text{ m/s}^2) = 30\text{ N}$

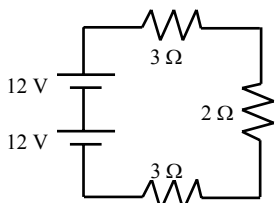
A person walks 5 m/s for 60 seconds. How far did they walk?
 $S = D/T$ $D = 5 \times 60 = 300\text{ m}$
 so, $D = ST$

A 45 N force pulls to the left and friction is 15 N. Find the net force: $45\text{ N} - 15\text{ N} = 30\text{ N to the left}$

What acceleration will the above net force give a 3 kg mass?
 $F = ma$ $a = 30/3 = 10\text{ m/s}^2$
 so, $30\text{ N} = 3(a)$

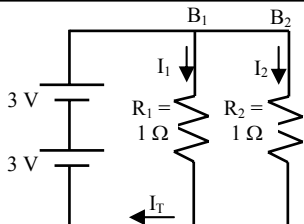
A piece of wood is burned and releases 55 joules of chemical energy. 30 J is transformed into thermal energy, 15 J is transformed into mechanical energy. By the Law of Conservation of Energy, how much energy becomes radiant energy? $E_{before} = E_{after}$
Must be 55 J after, so $55 J - 30 J - 15 J = 10 J$ of radiant energy.

You increase the current in an electromagnet. The strength of the electromagnet increases or decreases?



Series or Parallel?

$V_T = 24 \text{ v}$ _____
 $R_T = 8 \Omega$ _____
 $I_T = V/R = 3 \text{ A}$ _____
 $P = VI = 72 \text{ w}$ _____



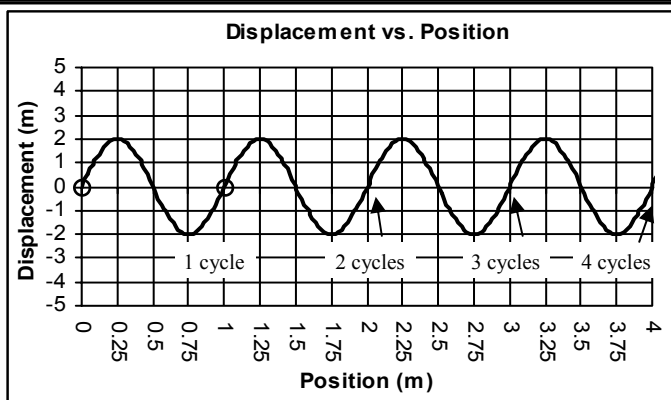
Series or Parallel?

$V_T = 6 \text{ v}$ _____ $I_T = 12 \text{ A}$ _____
 $I_1 = V/R = 6 \text{ A}$ _____ $R_T = V/I = 0.5 \Omega$ _____
 $I_2 = 6 \text{ A}$ _____ $P = VI = 72 \text{ w}$ _____

Naffet (in kurls) \rightarrow $n = \frac{G}{C}$ \leftarrow Gorts (in lyrs)
 \leftarrow Cintros (in tr/i)

Naffet equals Gorts divided Cintros

How much Naffet does a 12 lyr box have when given 4 tr/i.
 $n = G/C = 12 \text{ lyr} / 4 \text{ tr/i} = 3 \text{ kurls}$
(This not a real equation. It's an exercise in reading equations.)



Mark 1 cycle of the wave.
 Starting at 0.75 m, where does the 2nd cycle end: 2.75 m
 Number of complete cycles: 4
 Wavelength: 1 m Amplitude: 2 m

Find the speed of a 12 Hz wave with a 5 m wavelength.
 $v = f\lambda = (12\text{Hz})(5\text{m}) = 60 \text{ m/s}$

Is the person doing work?

- Y _ When pushing a 1000 N car 20 meters?
 Y _ When lifting a rock off the ground?
 N _ When holding a book in their hands?

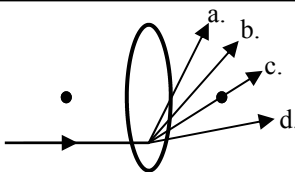
A person is hammering nails a long way from you. It takes 2 seconds for the sound to get to you. How far away are they?

$S = D/T$ speed of sound = 340 m
 so, $D = TS = 340 \times 2 = 680 \text{ m}$
 Make these twice as loud: 60 dB to 80 dB; 25 dB to 55 dB.

Make these half as loud: 100 dB to 80 dB; 35 dB to 15 dB.

In 2 seconds, a 3 N force pushes for 6 m to cause a 25 kg object to end up going 10 m/s.

- Find the momentum of the object
 $p = mv = 25\text{kg} \times 10 \text{ m/s} = 250 \text{ kgm/s}$
- Calculate the object's final kinetic energy.
 $Ek = 1/2 (m)(v)^2$
 $Ek = 1/2(25\text{kg})(10)^2 = 1/2(25)(100) = 25(50) = 1250 \text{ J}$
- A how much work is done to accelerate the object?
 $W = Fd = 3\text{N} \times 6 \text{ m} = 18 \text{ J}$
- How much power was used on the object?
 $P = W/t = 18\text{J} / 2 \text{ sec} = 9 \text{ watts}$



Where will the income ray go? C.
 What is the dot called?
Focal point or focus
 Why does the light bend?
refraction
 Concave or convex lens?

Find its period: $T = 1/f = 1/200 = 0.005 \text{ sec}$

What harmonic is this? 4th (4 antinodes)

Could a human hear this frequency? Yes
 Mark the nodes and anti-nodes.
 Mark one wavelength.
 How many wavelengths total is it? 2
 Find the fundamental frequency:

$f_f = 200/4 = 50 \text{ Hz}$

5th harmonic frequency:

$f_{5x} = 50 \text{ Hz} \times 5 = 250 \text{ Hz}$



200 Hz