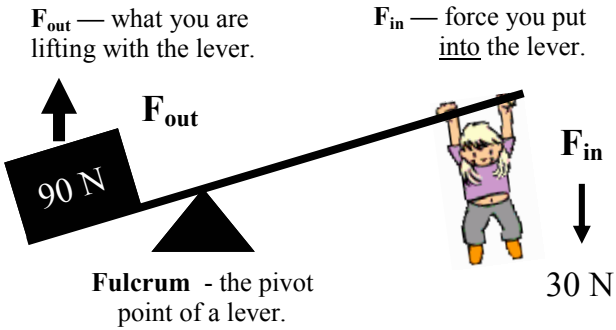


Levers

Using Forces to find MA



$$MA = \frac{F_{out}}{F_{in}} = \frac{90\text{ N}}{30\text{ N}} = 3$$

This lever multiplies force by 3!

Ex. A 250 N crate is picked up by pushing on a lever with 50 N of force. Find the MA of the lever.

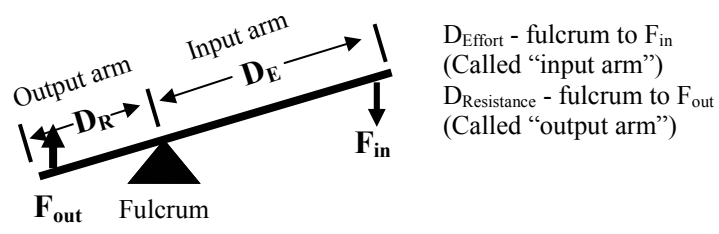
$F_{out} = 250\text{ N}$ $F_{in} = 50\text{ N}$ MA = ?	$MA = \frac{F_{out}}{F_{in}} = \frac{250\text{ N}}{50\text{ N}}$ $MA = 5$
--	---

Ex. A lever has an MA of 6. If you weigh 50 N, how much can you lift with the lever?

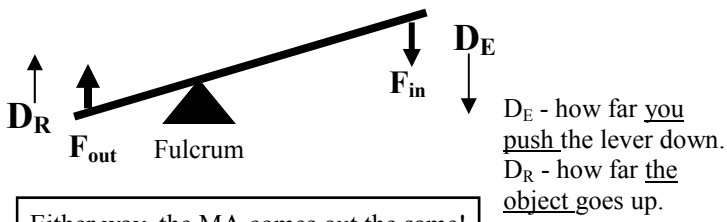
MA = 6 $F_{in} = 50\text{ N}$ $F_{out} = ?$	If $MA = \frac{F_{out}}{F_{in}}$ then $F_{out} = (MA)(F_{in}) = 6(50\text{ N})$ $F_{out} = 300\text{ N}$
---	--

Using Distances to find MA - 2 ways

Using distances from the fulcrum



Using how far the ends move



Either way, the MA comes out the same!

Ex. A lever has an input arm of 6 m and an output arm of 2 meters. Find the MA of the lever.

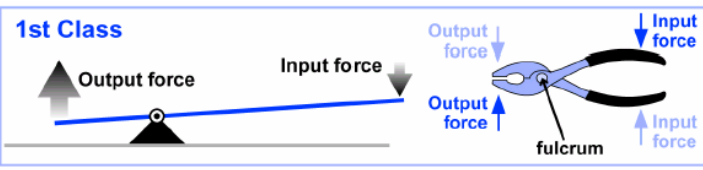
$Arm_{in} = D_E = 6\text{ m}$ $Arm_{out} = D_R = 2\text{ m}$ MA = ?	$MA = \frac{D_E}{D_R} = \frac{6\text{ m}}{2\text{ m}}$ $MA = 3$
---	---

Ex. To lift a box, you pull down 40 cm. The box moves up only 5 cm. Find the MA of the lever.

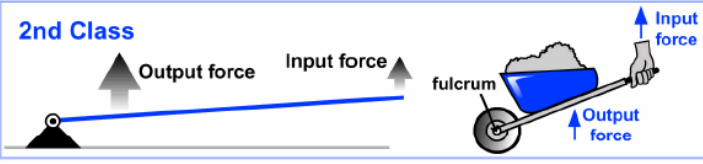
$D_E = 40\text{ cm}$ $D_R = 5\text{ cm}$ MA = ?	$MA = \frac{D_E}{D_R} = \frac{40\text{ cm}}{5\text{ cm}}$ $MA = 8$
---	--

Types of Levers

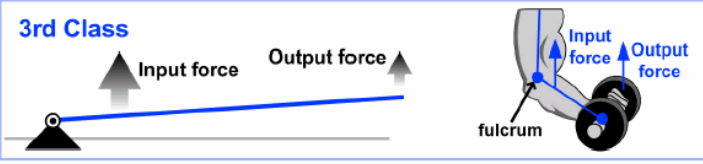
First Class Levers have the fulcrum in the middle. Examples are seesaws, scissors, and pliers.



Second Class Levers have the output force in the middle. Examples are wheelbarrows and nutcrackers.



Third Class Levers have the input force in the middle. Most body parts are good examples (arms and legs), as are most sports equipment (bats, rackets, and clubs).



Name: _____

Period: _____

Draw an arrow to the fulcrum of each lever.

Identify these levers as first, second, or third class:

A. _____

B. _____

C. _____

D. _____

E. _____

F. _____



A. Shovel
— handle is fulcrum.



B. Scissors



C. Nutcracker—output is cracking the nuts.



D. Wheelbarrow



E. Hammer
(when pulling nails)



F. Stapler—you push in the middle.

Input or Output Force?	Distance of Effort or Distance of Resistance?
<p>_____ You use a lever to lift a 45 N rock.</p> <p>_____ You stand on the end of a lever.</p> <p>_____ A lever lifts a 38 N crate.</p> <p>_____ A lever applies 78 N of force to a car.</p> <p>_____ To lift an object you have to apply 8 N of force.</p>	<p>_____ The part of the lever that lifts the object.</p> <p>_____ The part of the lever you pull on.</p> <p>_____ How much you pull down the lever.</p> <p>_____ A block is lifted up 4 cm with a lever.</p> <p>_____ You have to pull down 50 cm to lift a rock.</p>
<p>A lever has a 36 cm input arm and a 6 cm output arm. Find MA.</p>	<p>Which of Newton's Three Laws Applies?</p>
<p>A lever takes 150 N to lift a 75 N object. Find MA.</p>	<p>_____ To make a skateboard go forward, you push backward.</p> <p>_____ You need good tires to help a car go around curves.</p> <p>_____ If you want to throw a ball faster, you will need to throw it harder.</p> <p>_____ After you hit a hockey puck it glides straight across the ice.</p>
<p>You have to pull down 15 cm to lift a box 5 cm. Find MA.</p>	<p>A 25 N and 5 N force pull to the right. Friction is 10 N. If the object is 5 kg, find the net force and acceleration.</p>
<p>The MA of a lever is 4. If you have to lift the object up 20 cm, how far will you have to pull down?</p>	<p>An 60 kg astronaut throws a 3 kg wrench to the left. The wrench ends up going 10 m/s to the right. Find the velocity of the astronaut.</p>