


Name: _____

Period: _____

Standing Waves

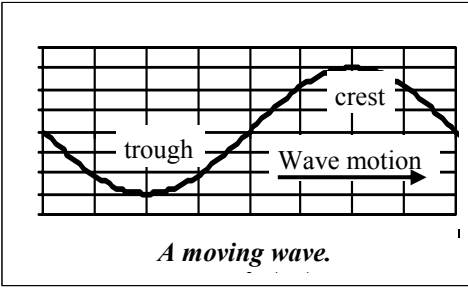
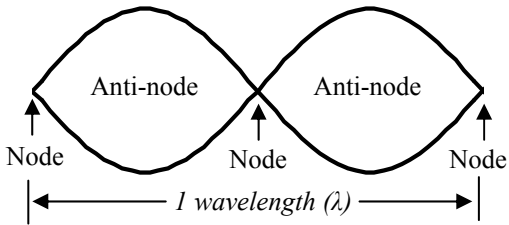
We know that waves move. Yet waves can be trapped between **boundaries**. These are known as **standing waves**.

A jump rope is a good example of a standing wave.



To keep a standing wave going it needs to have a **driven end**: an end that gives energy to the wave. Jump ropes have **two** driven ends.

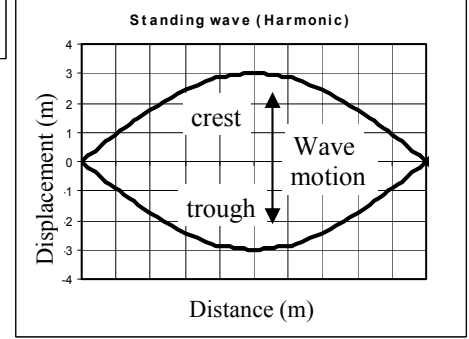
The places of no amplitude are called **nodes**. The places of greatest amplitude are called **anti-nodes**.



A moving wave.

Standing waves are **TRAPPED** between boundaries, so we show both the crest and the trough in the same place at the same time. In reality, though, it alternates: going up and down, just like a jump rope.

In a *moving* wave, the wave moves away from what drives it. Waves that move away from a rock in a pond are driven by the force of the rock pushing through the water.



A graph of the fundamental wave for this distance.

In a standing wave, each anti-node is one-half of a wavelength.

1 Anti-node = (1/2)λ

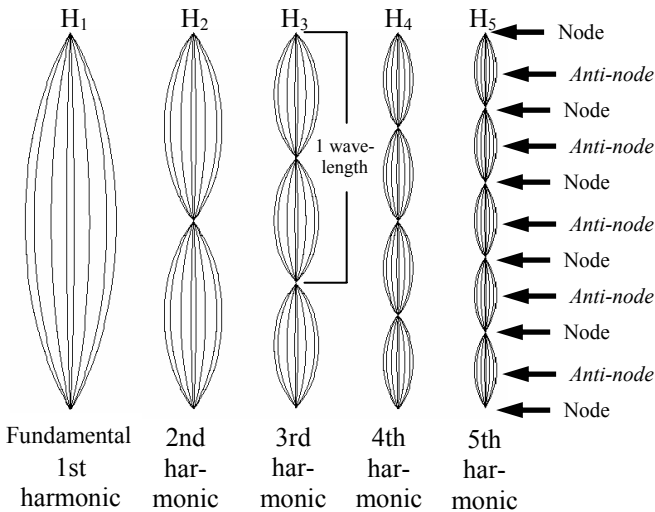
2 Anti-nodes = λ

The largest wave that can be produced in a certain distance is called the **fundamental**. It is one-half of one wavelength long.

Harmonics

Harmonics are waves that are whole number multiples of the fundamental. **Harmonics** have nodes at the boundaries. Harmonics sound louder, keep their energy longer, and take less energy to produce.

First 5 Harmonics of a Vibrating String



Frequency of Harmonics

$$\text{Frequency of harmonic } x \text{ (in Hz)} \rightarrow f_{Hx} = f_f (X) \leftarrow \begin{matrix} \# \text{ of the} \\ \text{Harmonic} \end{matrix}$$

↑
Frequency of the fundamental (in Hz)

Ex. Find the frequency of the third harmonic (H₃) of a 4 Hz fundamental.

$f_f = 4 \text{ Hz}$	$f_{Hx} = f_f(X)$
$X = 3$	$f_{H3} = (4 \text{ Hz}) \times (3)$
$f_{H3} = ?$	$f_{H3} = 12 \text{ Hz}$

Ex. If the fifth harmonic has a frequency of 55 Hz, find the fundamental frequency.

$f_{H5} = 55 \text{ Hz}$	$f_{Hx} = f_f(X)$
$X = 5$	$f_f = f_{Hx}/X = 55 \text{ Hz}/5$
$f_f = ?$	$f_f = 11 \text{ Hz}$

Examples of Fundamentals and their Harmonics				
$H_1 (f_f)$	H_2	H_3	H_4	H_5
1 Hz	2 Hz	3 Hz	4 Hz	5 Hz
2 Hz	4 Hz	6 Hz	8 Hz	10 Hz
5 Hz	10 Hz	15 Hz	20 Hz	25 Hz
10 Hz	20 Hz	30 Hz	40 Hz	50 Hz

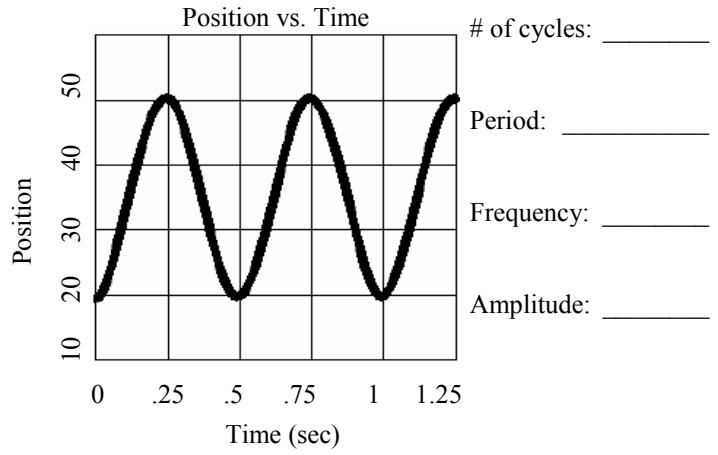
Non-Harmonic Wave

Non-harmonic waves can be forced into boundaries, too. The wave will die out quickly, sound quieter (if a sound wave), and take more energy to produce.

Name: _____

Period: _____

- | | |
|------------------|--|
| 1. Boundary | A. The part that is moved to give energy. |
| 2. Standing wave | B. Where wave's amplitude is greatest. |
| 3. Harmonic | C. Where the wave has no motion. |
| 4. Fundamental | D. A wave that is a multiple of another wave. |
| 5. Driven end | E. A wave that is trapped within boundaries. |
| 6. Node | F. The first harmonic of a standing wave, equal to 1/2 its wavelength. |
| 7. Anti-node | G. A place that limits a wave's motion. |



- | | |
|----------------------|-------|
| 1. $f =$ _____ | 8 m/s |
| 2. $v =$ _____ | 8 sec |
| 3. $\lambda =$ _____ | 8 Hz |
| 4. $T =$ _____ | 8 m |

If a wave's frequency is 25 Hz, what is its period?

If a wave's period is 0.1 sec, find its frequency.

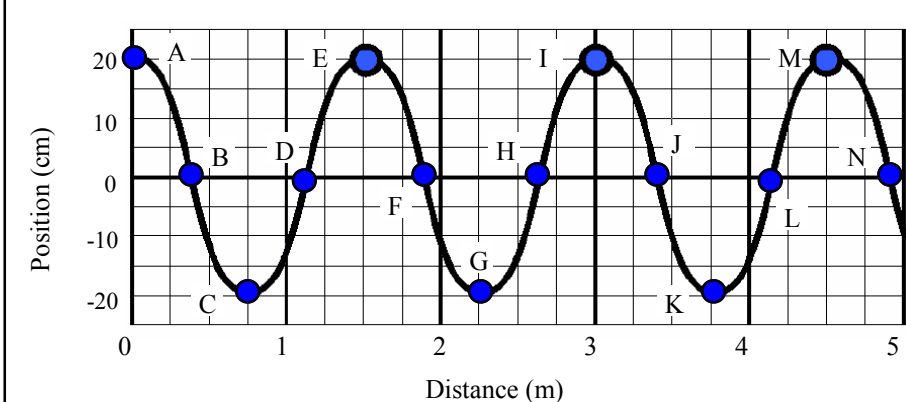
If a wave has a frequency of 50 Hz and a wavelength of 2 meters. Find its speed.

A wave's velocity is 20 m/sec with a wavelength of 40 m. What is its frequency?

A string has a fundamental of 15 Hz, find the frequency of harmonic 3 (H_3).

If 20 Hz is the fundamental, find H_6 .

If 35 Hz is H_7 , what is the fundamental frequency?



One cycle: A to ____; C to ____; F to ____.

Half cycle: H to ____; J to ____; B to ____.

Two cycles: B to ____; D to ____; E to ____.

Total cycles: _____

Wavelength: _____

Amplitude: _____

The following table shows the frequencies of the first 5 harmonics of different strings. Fill in the blank spaces.

	1	2	3	4	5
4 Hz					
6 Hz					
		4 Hz			
			36 Hz		
				44 Hz	

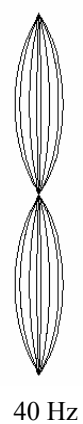
Find its period: _____

What harmonic is this? _____

Mark the nodes and anti-nodes.

Find the fundamental frequency:

3rd harmonic frequency:



40 Hz

A fellow student shows you the frequencies of four harmonics of a string. Which one would you question and why?

Frequencies: 12 Hz; 24 Hz; 29 Hz; 48 Hz